

puzzle 1


What time completes this pattern ?



www.mathinenglish.com

puzzle 2

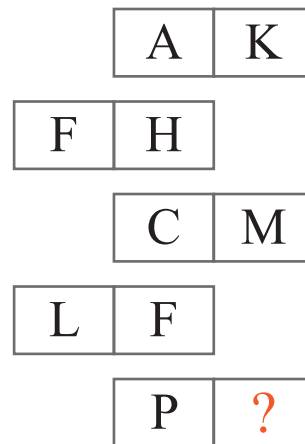
Which number is missing here?



www.mathinenglish.com

puzzle 3

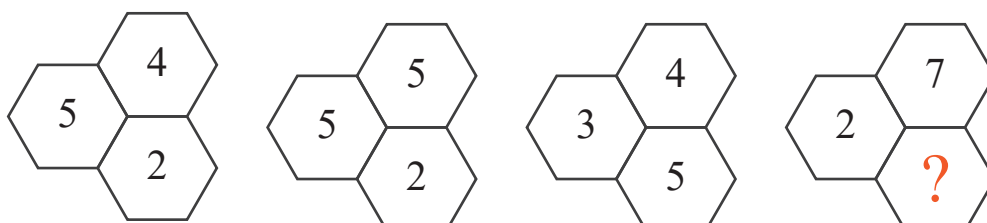
Which letter is missing here ?



www.mathinenglish.com

puzzle 4

Which number replaces the question mark ?



www.mathinenglish.com

## Answer to brain teasers

**puzzle 1 :** 5:15

The 1st digit +1, 2nd digit -1, 3rd digit +1 in each next watch.

**puzzle 2 :** 6

The corner numbers are the sum of their 2 adjacent numbers.

**puzzle 3 :** D

The values of the 2 cells in each row follow a 12,14,16, 18, 20 pattern.

**puzzle 4 :** 5

The cells in each group of hexagons multiplied follow a 40, 50, 60, 70 pattern.