


puzzle 1


Which option completes this pattern ?



www.mathinenglish.com

puzzle 2

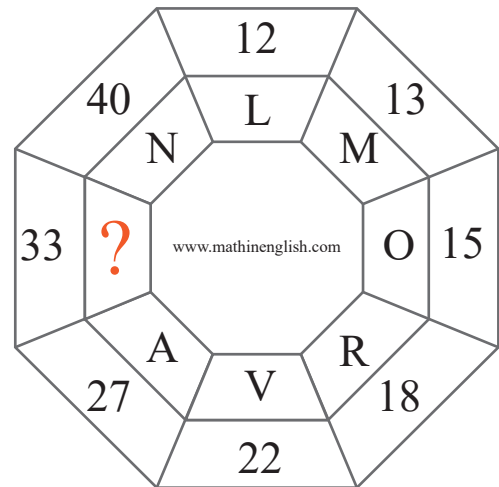
What is the missing number in this puzzle ?



www.mathinenglish.com

puzzle 3

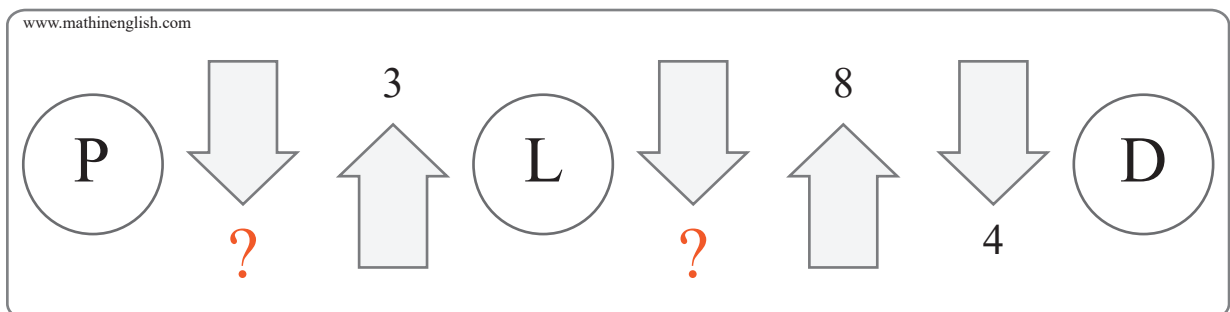
Which letter completes the pattern ?



www.mathinenglish.com

puzzle 4

Which 2 numbers are missing here ?



www.mathinenglish.com

Answer to brain teasers

puzzle 1 : C

Each row of dice adds up to 14.

puzzle 2 : 9

The 2nd row is 2 times the 1st row, and the 3rd row 2 times the 1st.

puzzle 3 : G

The numbers and letters follow a +1,+2,+3,+4, etc pattern.

puzzle 4 : 4 and 6

Arrow up is multiplying, and arrow down dividing.