


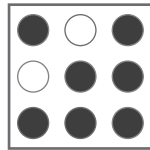

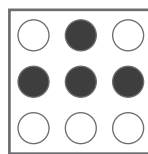
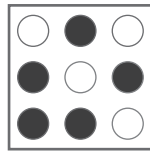

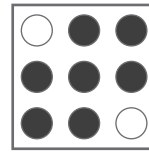


puzzle 1

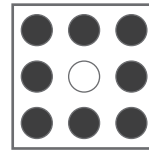
Which option is the correct one ?



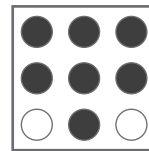
A



B



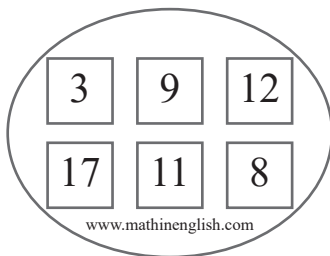
C



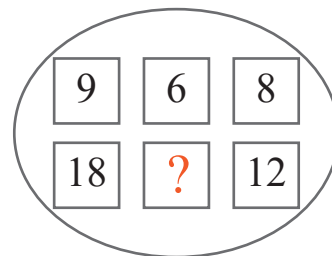
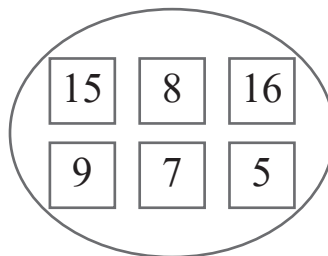
www.mathinenglish.com

puzzle 2

Which number completes the puzzle ?



www.mathinenglish.com



puzzle 3

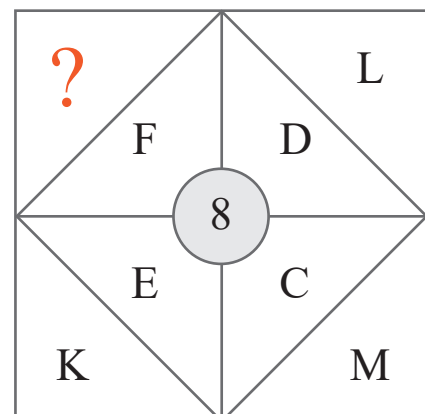
What is the pattern here ?

2	3	3
2	?	8
2	3	4
6	4	2

www.mathinenglish.com

puzzle 4

What the value of the missing letter?



www.mathinenglish.com

Answer to brain teasers

puzzle 1 : B

Each column follows a pattern of +2 shaded dots.

puzzle 2 : 7

The average of the 6 numbers in each oval of 10.

puzzle 3 : 0

The puzzle follows a vertical pattern of +4, starting with 22.

puzzle 4 : J

The average number value of each corner pair is 8.