
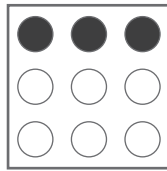

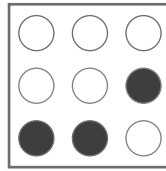
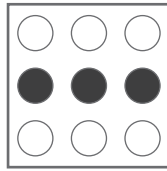


puzzle 1

Which option is the correct one ?



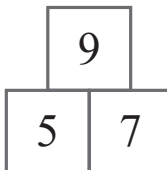
www.mathinenglish.com




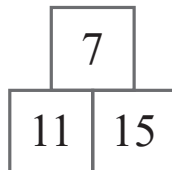
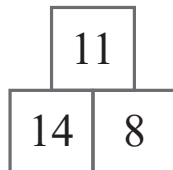
- (A)
- (B)
- (C)

puzzle 2

Which number completes the puzzle ?

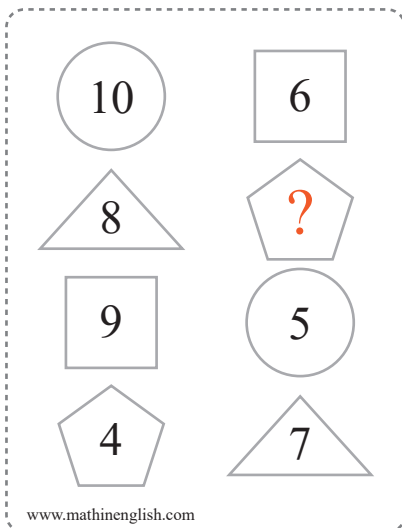


www.mathinenglish.com



puzzle 3

What is the value of the question mark?



www.mathinenglish.com

puzzle 4

What the value of the missing number?



www.mathinenglish.com

Answer to brain teasers

puzzle 1 : C

The shaded dots move 2 places in the next square.

puzzle 2 : 19

The sums follow a +2, +3, +4 and +5 pattern. The start rotates in each next pyramid.

puzzle 3 : 11

All shape pairs add up to 15.

puzzle 4 : 4

In each row multiply the left and right number and add 5.