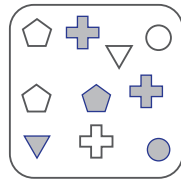
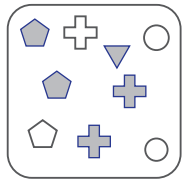
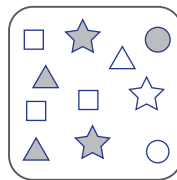



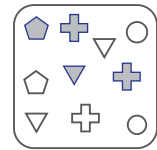
puzzle 1

Which option completes this pattern ?




?

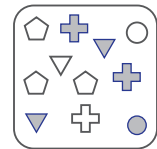
(A)



(B)

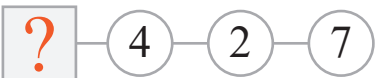


(C)



puzzle 2

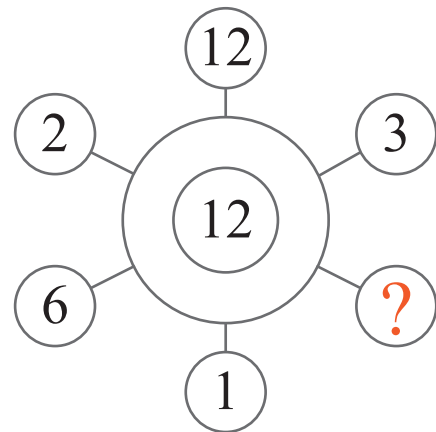
What is the missing letter in this puzzle ?



www.mathinenglish.com

puzzle 3

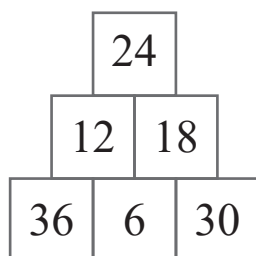
Which number completes the pattern ?



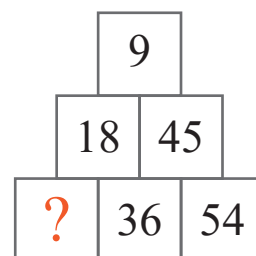
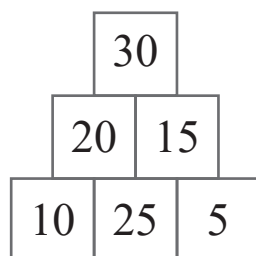
www.mathinenglish.com

puzzle 4

Which number completes this number sequence ?



www.mathinenglish.com



## Answer to brain teasers

**puzzle 1 :** C

Each row follows a 9, 10, 11 pattern of number of symbols.

**puzzle 2 :** F

The first 2 circles in each row divided by the 3rd gives the value of the letter in the square.

**puzzle 3 :** 4

The numbers 1,2,3,4,6 and 12 are the factors of 12.

**puzzle 4 :** 27

Each pyramid contains the first 6 multiples of 6, 5 and 9.