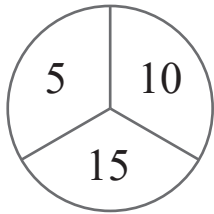
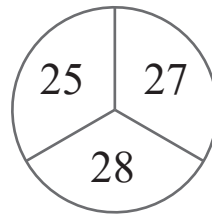
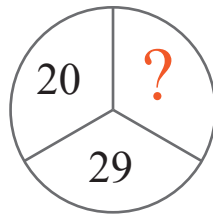
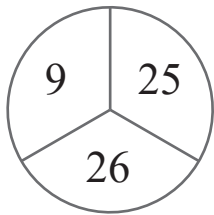
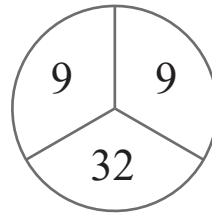
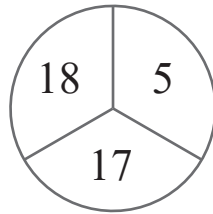


puzzle 1

Which number is needed to complete this puzzle ?

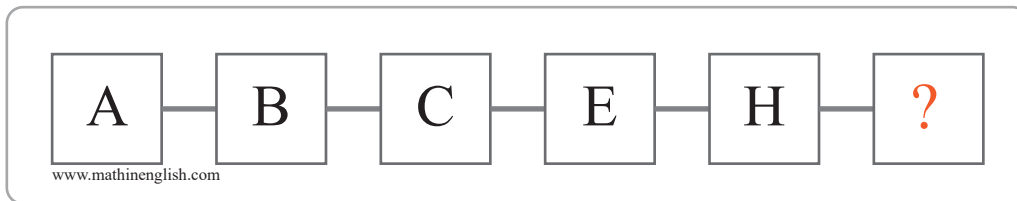


www.mathinenglish.com



puzzle 2

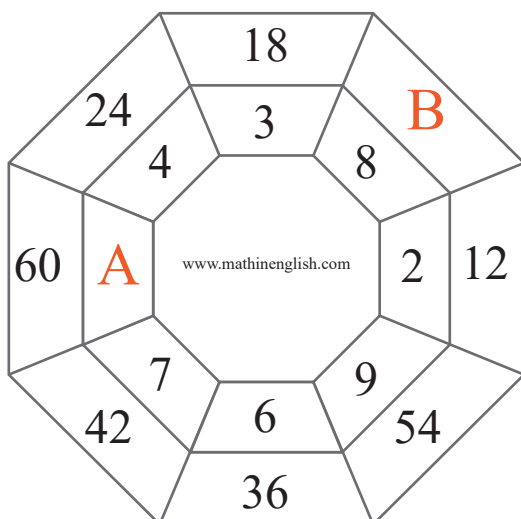
Which letter completes the puzzle ?



www.mathinenglish.com

puzzle 3

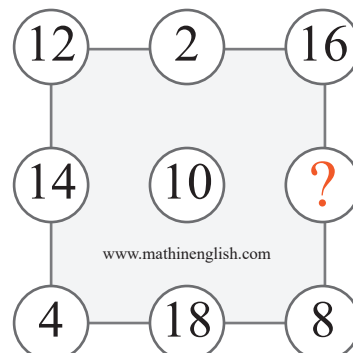
What is the sum of A and B ?



www.mathinenglish.com

puzzle 4

What is the value of the question mark ?



www.mathinenglish.com

Answer to brain teasers

puzzle 1 : 21

The sums of the circles follow the pattern 30,40,50, 60 and so on.

puzzle 2 : M

The letter values of E and H add up to 13, M.

puzzle 3 : 58

Multiply the inner numbers by 6 to get the outer numbers.

A = 10 and B = 48

puzzle 4 : 6

Each row and column adds up to 30.