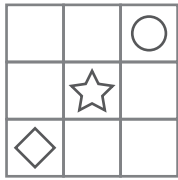
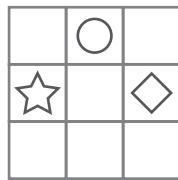
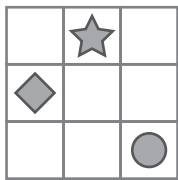
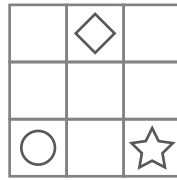
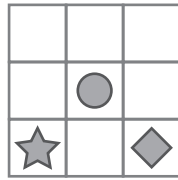


puzzle 1

Which option completes this pattern ?




www.mathinenglish.com



- (A)
- (B)
- (C)

puzzle 2

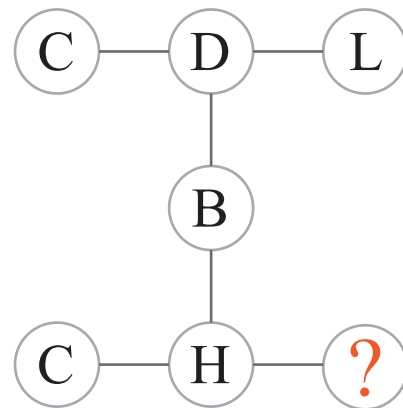
What is the missing number in this puzzle ?



www.mathinenglish.com

puzzle 3

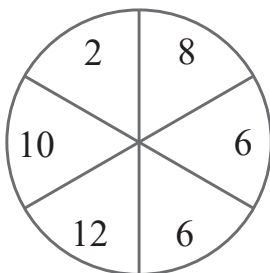
Which letter completes the pattern ?



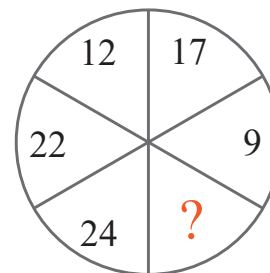
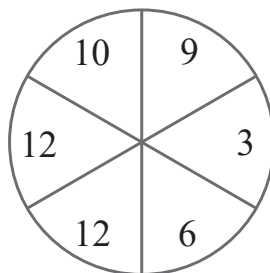
www.mathinenglish.com

puzzle 4

Which number completes this number sequence ?



www.mathinenglish.com



## Answer to brain teasers

**puzzle 1 :** C

The shapes move 2 positions in the next shape and alternate between shaded and non shaded.

**puzzle 2 :** 16

Multiply the left and right number to get the middle number.

**puzzle 3 :** X

Multiply the letter values in each row or column to get the 3rd letter in each row or column.

**puzzle 4 :** 12

The numbers in the first 2 circles add up to the numbers, in the same place, in the 3rd circle.