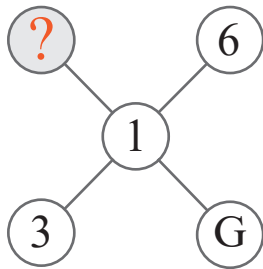
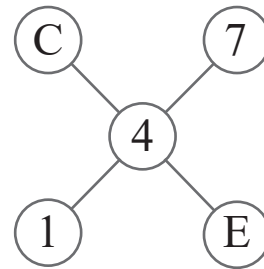
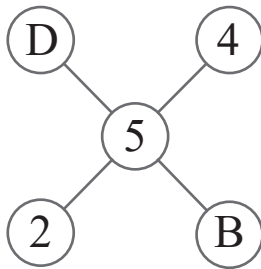


puzzle 1

What is the missing number in this pattern ?

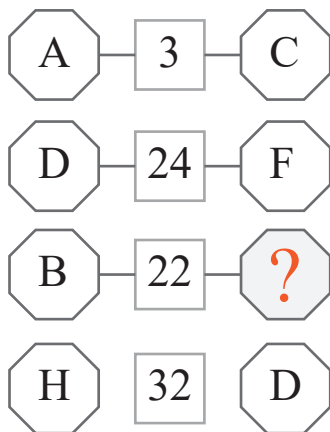


www.mathinenglish.com



puzzle 2

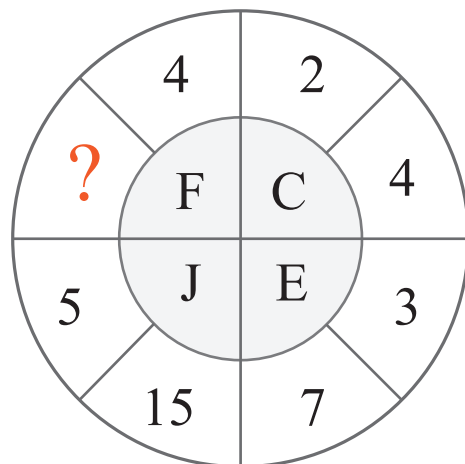
Which letter is missing here?



www.mathinenglish.com

puzzle 3

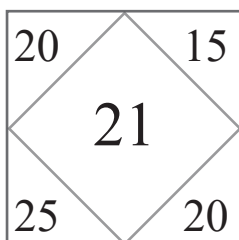
Which number completes this pattern ?



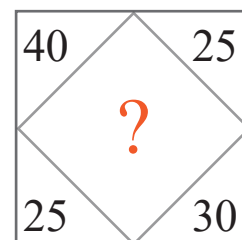
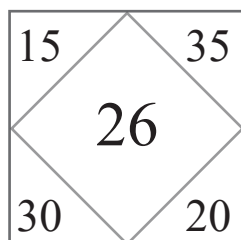
www.mathinenglish.com

puzzle 4

Which number completes the sequence ?



www.mathinenglish.com



Answer to brain teasers

puzzle 1 : 2

The legs in the first shape add up to 10, 11 in the 2nd and 12 in the 3rd.

puzzle 2 : K

B times K, or 2 times 11 is 22.

puzzle 3 : 8

The average of 8 and D, 8 and 4, is 6, or F.

puzzle 4 : 31

The average of the 4 corner numbers plus 1.