








Which is the lightest?

Order the objects from lightest (1) to heaviest (3)




Which is the lightest?


Order the objects from lightest (1) to heaviest (3)




1



2




3



3



2




1



1



3




2



2



3




1



1



2



3