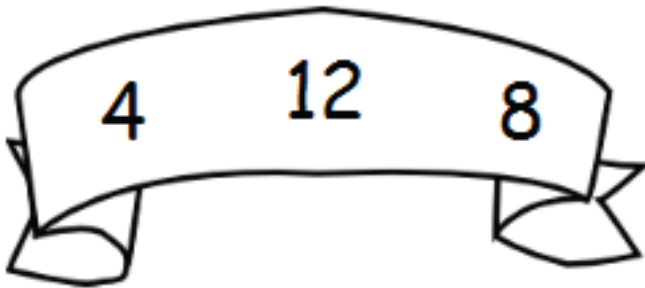


Fact Families

Name: _____ Class: _____

Use the 3 numbers in each banner to write all the possible addition and subtraction sentences. The first one is done for you.

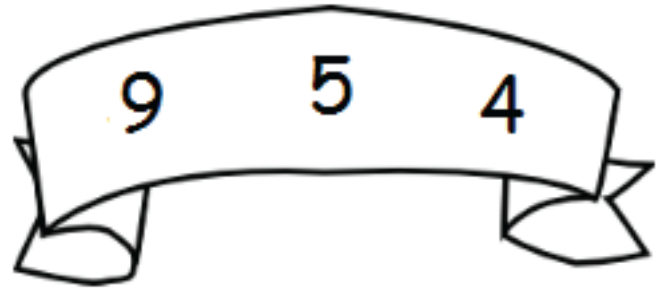


$$\underline{4} + \underline{8} = \underline{12}$$

$$\underline{8} + \underline{\quad} = \underline{\quad}$$

$$\underline{12} - \underline{\quad} = \underline{\quad}$$

$$\underline{12} - \underline{\quad} = \underline{4}$$

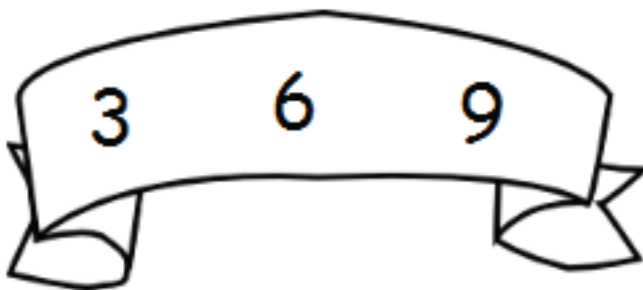


$$\underline{\quad} + \underline{\quad} = \underline{\quad}$$

$$\underline{\quad} + \underline{\quad} = \underline{\quad}$$

$$\underline{\quad} - \underline{\quad} = \underline{\quad}$$

$$\underline{\quad} - \underline{\quad} = \underline{\quad}$$

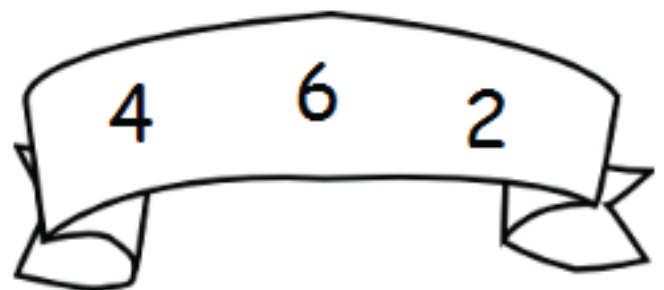


$$\underline{\quad} + \underline{\quad} = \underline{\quad}$$

$$\underline{\quad} + \underline{\quad} = \underline{\quad}$$

$$\underline{\quad} - \underline{\quad} = \underline{\quad}$$

$$\underline{\quad} - \underline{\quad} = \underline{\quad}$$



$$\underline{\quad} + \underline{\quad} = \underline{\quad}$$

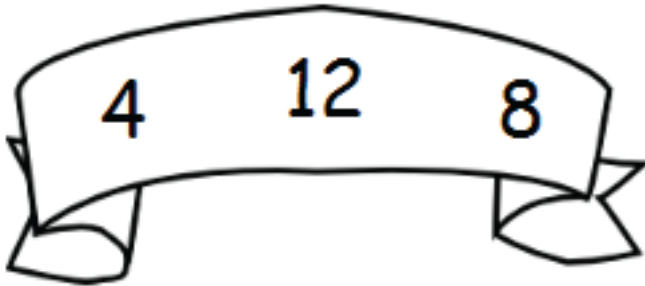
$$\underline{\quad} + \underline{\quad} = \underline{\quad}$$

$$\underline{\quad} - \underline{\quad} = \underline{\quad}$$

$$\underline{\quad} - \underline{\quad} = \underline{\quad}$$

Answers

Use the 3 numbers in each banner to write all the possible addition and subtraction sentences. The first one is done for you.

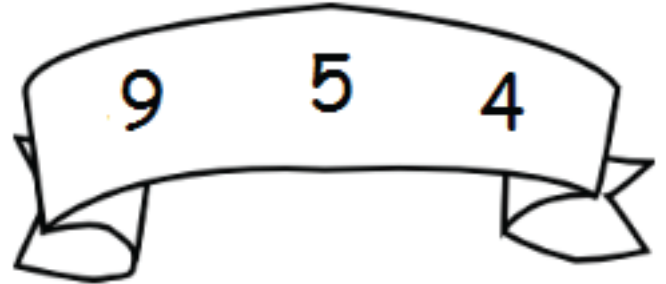


$$\underline{4} + \underline{8} = \underline{12}$$

$$\underline{8} + \underline{4} = \underline{12}$$

$$\underline{12} - \underline{4} = \underline{8}$$

$$\underline{12} - \underline{8} = \underline{4}$$

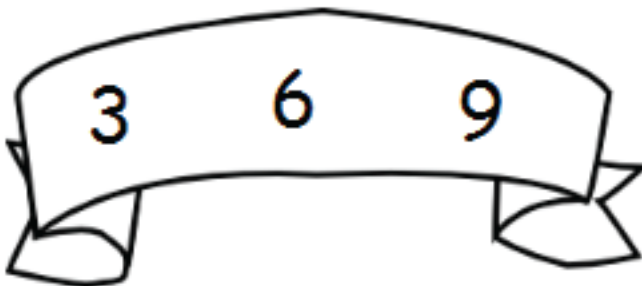


$$\underline{5} + \underline{4} = \underline{9}$$

$$\underline{4} + \underline{5} = \underline{9}$$

$$\underline{9} - \underline{5} = \underline{4}$$

$$\underline{9} - \underline{4} = \underline{5}$$

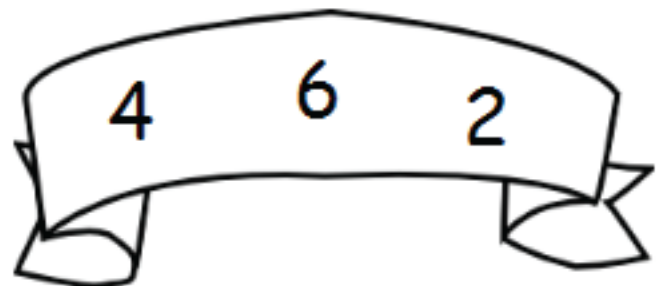


$$\underline{3} + \underline{6} = \underline{9}$$

$$\underline{6} + \underline{3} = \underline{9}$$

$$\underline{9} - \underline{3} = \underline{6}$$

$$\underline{9} - \underline{6} = \underline{3}$$



$$\underline{4} + \underline{6} = \underline{10}$$

$$\underline{6} + \underline{4} = \underline{10}$$

$$\underline{10} - \underline{4} = \underline{6}$$

$$\underline{10} - \underline{6} = \underline{4}$$