







Rows of blocks!

Study the pattern of the first 2 rows of blocks and apply it to fill in the missing numbers of the other rows.

		12	23	34		
		11	22	33		
25			47			
					64	
				41		







Find the pattern!

Study the first 2 stars in each oval and then complete the 3rd star.



Rows of blocks!

Study the pattern of the first 2 rows of blocks and apply it to fill in the missing numbers of the other rows.

		12	23	34		
		11	22	33	44	55
25	36	47	58	69	80	91
	20	31	42	53	64	
		19	30	41		



Find the pattern!

Study the first 2 stars in each oval and then complete the 3rd star.

Add and divide by 3

x2 and x 3

