



Path finder

For each block start at the bottom left and move up, down, or side ways until you reach finish. In both blocks, your path needs to add up to 68!

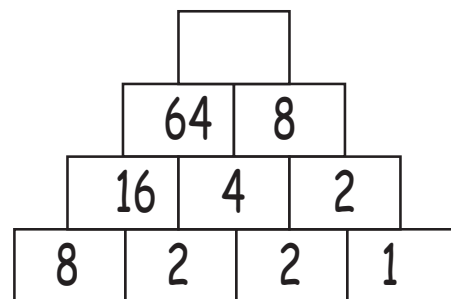
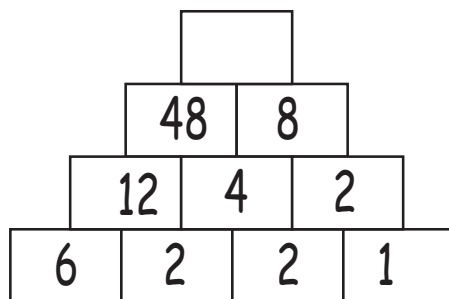
	12	3	8	1	7	9	1	Finish
	32	8	7	1	3	2	1	
	14	4	17	4	7	2	4	
	5	8	2	5	9	5	7	
Start	9	3	1	4	2	1	3	

	2	3	1	2	3	9	1	Finish
	13	21	19	1	5	8	9	
	7	15	13	8	8	11	24	
	4	8	7	8	7	3	13	
Start	2	9	6	9	2	2	1	



Number Pyramids!

What number comes on top of each pyramid?





Path finder

For each block start at the bottom left and move up, down, or side ways until you reach finish. In both blocks, your path needs to add up to 68!

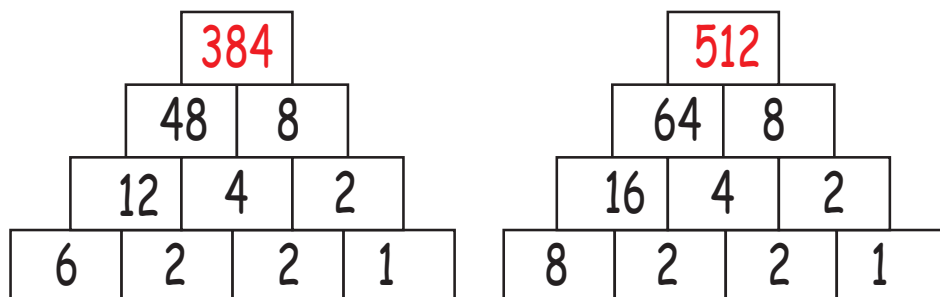
	12	3	8	1	7	9	1	Finish
	32	8	7	1	3	2	1	
	14	4	17	4	7	2	4	
	5	8	2	5	9	5	7	
Start	9	3	1	4	2	1	3	

	2	3	1	2	3	9	1	Finish
	13	21	19	1	5	8	9	
	7	15	13	8	8	11	24	
	4	8	7	8	7	3	13	
Start	2	9	6	9	2	2	1	



Number Pyramids!

What number comes on top of each pyramid?



Multiply the 2 numbers directly under a number!

