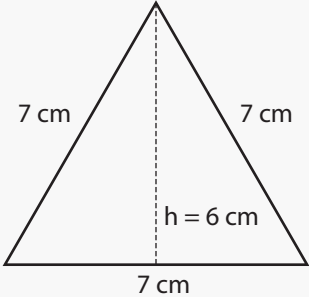


Perimeter and Area

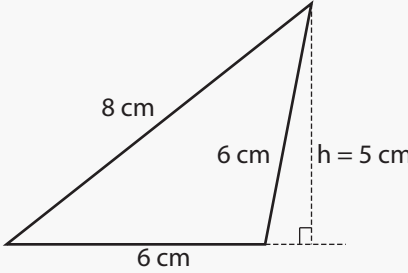
Name: _____ Class: _____

Find the area and perimeter area of the following triangles (not drawn to scale).



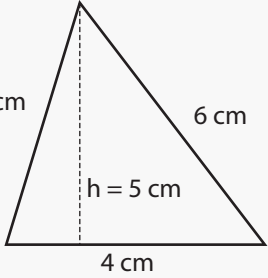
7 cm
7 cm
7 cm
h = 6 cm

Perimeter: _____
Area: _____



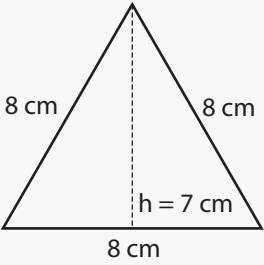
8 cm
6 cm
h = 5 cm
6 cm

Perimeter: _____
Area: _____



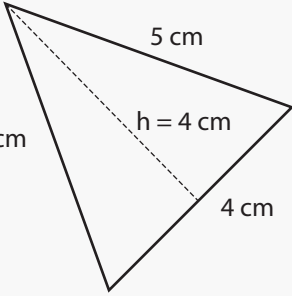
5 cm
6 cm
h = 5 cm
4 cm

Perimeter: _____
Area: _____



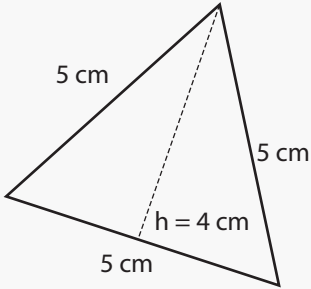
8 cm
8 cm
8 cm
h = 7 cm

Perimeter: _____
Area: _____



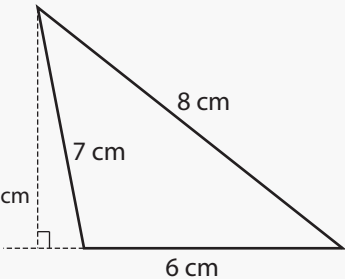
5 cm
5 cm
h = 4 cm
4 cm

Perimeter: _____
Area: _____



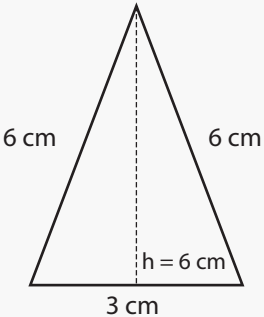
5 cm
5 cm
h = 4 cm
5 cm

Perimeter: _____
Area: _____



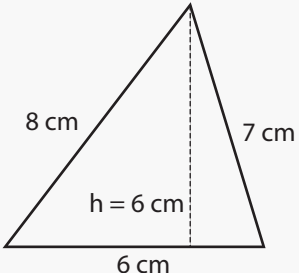
8 cm
7 cm
h = 6 cm
6 cm

Perimeter: _____
Area: _____



6 cm
6 cm
h = 6 cm
3 cm

Perimeter: _____
Area: _____

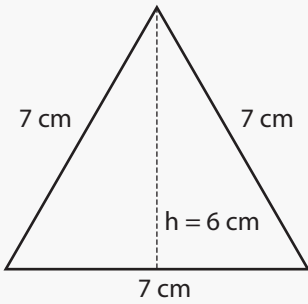


8 cm
7 cm
h = 6 cm
6 cm

Perimeter: _____
Area: _____

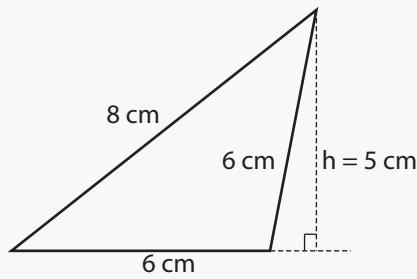
Answers

Find the area and perimeter area of the following triangles (not drawn to scale).



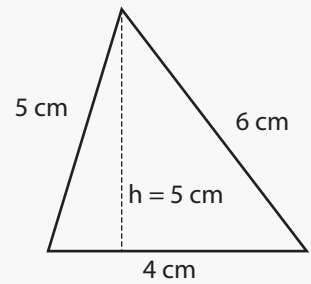
Perimeter: 21 cm

Area: 21 cm^2



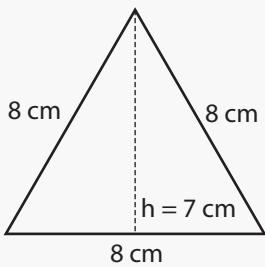
Perimeter: 20 cm

Area: 15 cm^2



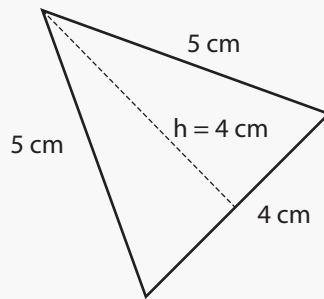
Perimeter: 15 cm

Area: 10 cm^2



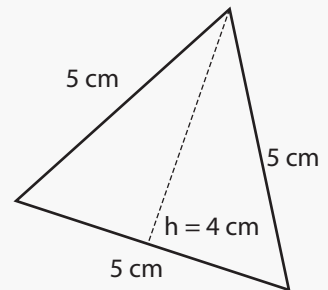
Perimeter: 24 cm

Area: 28 cm^2



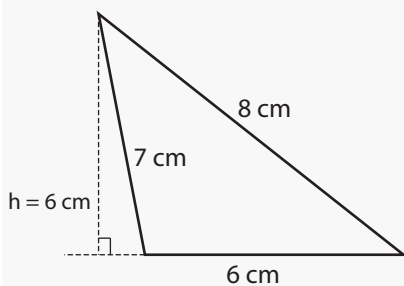
Perimeter: 14 cm

Area: 8 cm^2



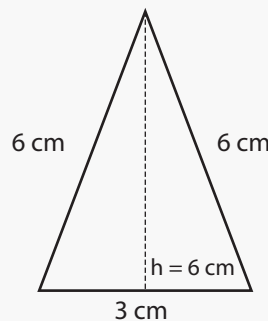
Perimeter: 15 cm

Area: 10 cm^2



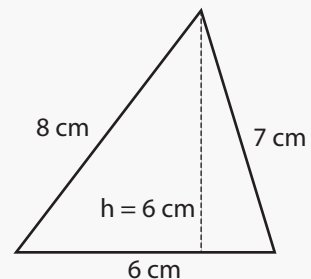
Perimeter: 21 cm

Area: 18 cm^2



Perimeter: 15 cm

Area: 9 cm^2



Perimeter: 21 cm

Area: 18 cm^2