


Complete the pictograph

The data table below shows the number of fish 4 boys have in their aquariums at home. Complete the pictograph and answer the questions.

Noah	Ben	Alex	Jack
15 fish	12 fish	18 fish	9 fish

Noah	
Ben	
Alex	
Jack	

Each  stands for 3 fish

Who has most fish in his aquarium ?

How many more fish does Alex have than Ben ?





Who has 3 fish more than Jack ?

How many fish do they have altogether ?

Complete the pictograph

The data table below shows the number of fish 4 boys have in their aquariums at home. Complete the pictograph and answer the questions.

Noah	Ben	Alex	Jack
15 fish	12 fish	18 fish	9 fish

Noah	
Ben	
Alex	
Jack	

Each  stands for 3 fish

Who has most fish in his aquarium ?

Alex

How many more fish does Alex have than Ben ?

6 fish

Who has 3 fish more than Jack ?

Ben

How many fish do they have altogether ?

54 fish
