



Card groups


Complete the multiplication sentences



$$4 \times 9 = 36$$



$$\square \times 8 = \square$$



$$4 \times \square = \square$$



$$\square \times \square = 54$$



$$5 \times \square = \square$$



$$\square \times 8 = \square$$



$$\square \times 9 = \square$$




$$6 \times \square = \square$$



$$2 \times \square = \square$$

Card groups


Complete the multiplication sentences




$$4 \times 9 = 36$$



$$5 \times 8 = 40$$



$$4 \times 8 = 32$$



$$6 \times 9 = 54$$



$$5 \times 9 = 45$$



$$3 \times 8 = 24$$



$$3 \times 9 = 27$$



$$6 \times 8 = 48$$



$$2 \times 8 = 16$$