



Card groups


Complete the multiplication sentences



$$4 \times 5 = \square$$



$$\square \times 10 = \square$$



$$4 \times \square = \square$$



$$\square \times 5 = \square$$




$$\square \times \square = 25$$



$$3 \times \square = \square$$



$$\square \times 5 = \square$$




$$\square \times \square = \square$$




$$\square \times \square = \square$$

Card groups


Complete the multiplication sentences



$$4 \times 5 = 20$$



$$5 \times 10 = 50$$



$$4 \times 10 = 40$$



$$6 \times 5 = 30$$




$$5 \times 5 = 25$$



$$3 \times 10 = 30$$



$$3 \times 5 = 15$$



$$6 \times 10 = 60$$



$$2 \times 5 = 10$$