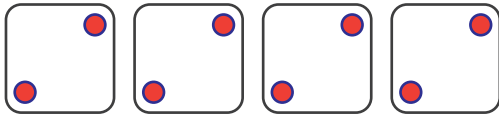
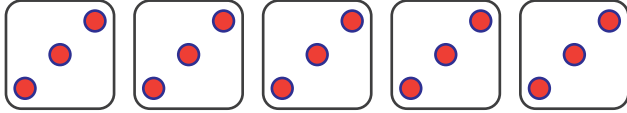


Dice groups

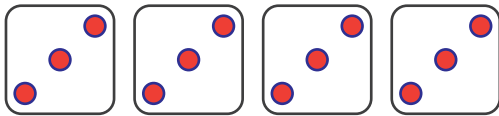
Complete the multiplication sentences



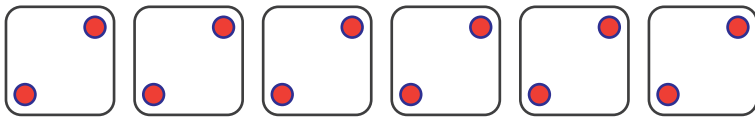
$$4 \times 2 = 8$$



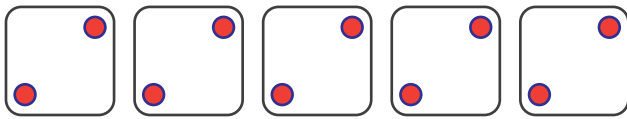
$$\square \times 3 = \square$$



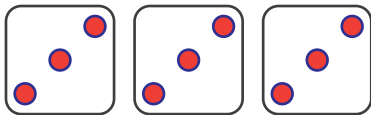
$$4 \times \square = \square$$



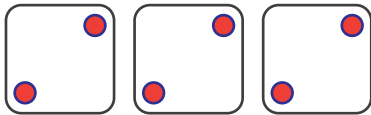
$$\square \times \square = 12$$



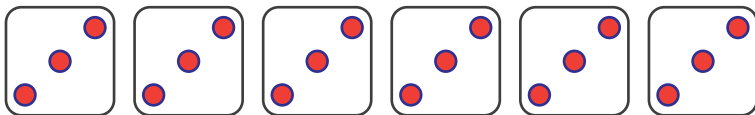
$$5 \times \square = \square$$



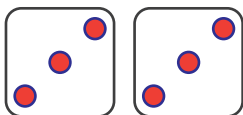
$$\square \times 3 = \square$$



$$\square \times 2 = \square$$



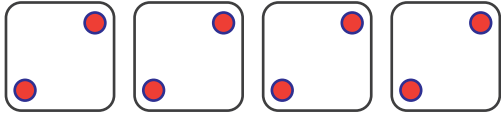
$$\square \times \square = \square$$



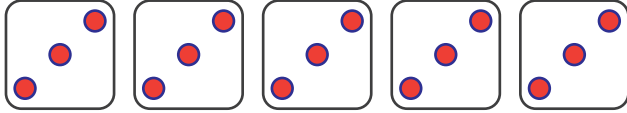
$$\square \times \square = \square$$

Dice groups

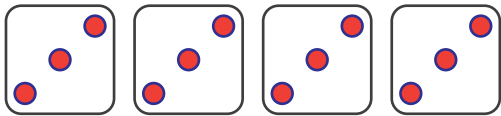
Complete the multiplication sentences



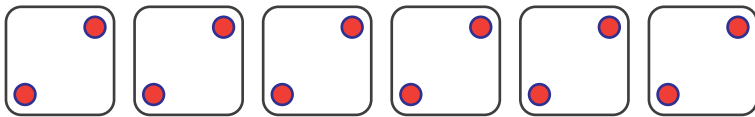
$$4 \times 2 = 8$$



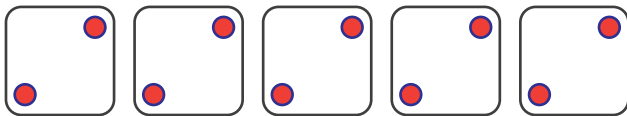
$$5 \times 3 = 15$$



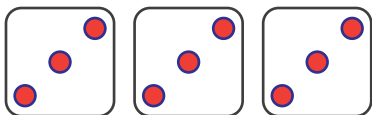
$$4 \times 3 = 12$$



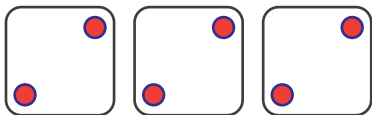
$$6 \times 2 = 12$$



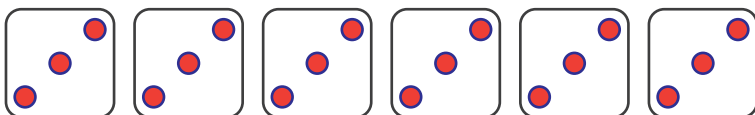
$$5 \times 2 = 10$$



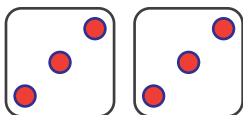
$$3 \times 3 = 9$$



$$3 \times 2 = 6$$



$$6 \times 3 = 18$$



$$2 \times 3 = 6$$