






Money tally chart

We asked some market vendors how much they earn each day, and made a tally chart of their answers. One tally mark stands for 10 Euros.

Name	tally marks	
Mario		€ 140
Janet		
Billy		
Eva		
May		

Who earns the most per day ?

How much can Mario earn if he works 2 days ?






How much more does Eva earn per day than Billy ?

Can May earn € 300 in 3 days ?

Can Billy earn € 300 in 2 days ?

Money tally chart

We asked some market vendors how much they earn each day, and made a tally chart of their answers. One tally mark stands for 10 Euros.

Name	tally marks	
Mario		€ 140
Janet		
Billy		
Eva		
May		

Who earns the most per day ?

Janet

How much can Mario earn if he works 2 days ?

€ 280

How much more does Eva earn per day than Billy ?

€ 40

Can May earn € 300 in 3 days ?

Yes, she can.

Can Billy earn € 300 in 2 days ?

No, he can't.
