


## Coin Division by 8 or 9


Complete the division sentences (divide by 8 or 9)




$$36 \div 9 = \square$$



$$45 \div 9 = \square$$




$$\square \div 8 = 2$$




$$\square \div 9 = 2$$




$$27 \div \square = 3$$



$$40 \div 8 = \square$$




$$\square \div 8 = 3$$



$$\square \div 9 = 4$$

## Coin Division by 8 or 9

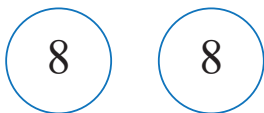
Complete the division sentences (divide by 8 or 9)



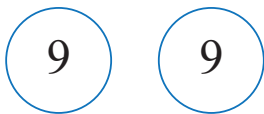
$$36 \div 9 = 4$$



$$45 \div 9 = 5$$



$$16 \div 8 = 2$$



$$18 \div 9 = 2$$




$$27 \div 9 = 3$$



$$40 \div 8 = 5$$



$$24 \div 8 = 3$$



$$36 \div 9 = 4$$