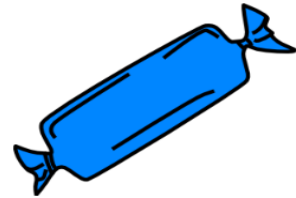


# Grade 2      Multiplication and Division      Word Problems

Name: \_\_\_\_\_ Class: \_\_\_\_\_

## Question 1

5 boys share 35 candies equally.  
How many candies does each boy get?

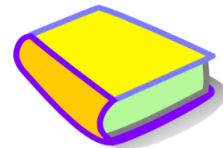


## Question 2

24 children are put into equal groups. There are 4 children in each group.  
How many equal groups are there?

## Question 3

Mandy put 24 books in 3 equal groups.  
How many books did she put in each group?



## Question 4

A hamburger costs 2 dollars. Miss Jones has 20 dollars.  
How many hamburgers can she buy?

**Question 5**

Jenny bought 8 t-shirts. Each t-shirt cost 5 dollars.  
How much money did she spend?

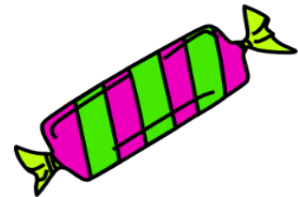


**Question 6**

There are 5 fingers on each hand. How many fingers do 3 boys have?

**Question 7**

5 girls share 40 candies equally.  
How many candies does each girl get?



**Question 8**

Jacob drinks 3 liters of water each day? How much water does he drink in 2 weeks?

**Question 9**

A full can of Coca-Cola has a volume of 330 milliliters. What is the volume of 2 full cans of Coca-Cola?




### Question 10

There are 9 fish in each fish tank.  
How many fish are there in 7 fish tanks?

### Question 11

Yesterday I was hungry and bought 8 hamburgers.  
The price of 1 hamburger was 2 dollars.  
How much money did I spend?



### Question 12

There are 4 eggs on each plate.  
How many eggs are there on 7 plates?

## Answers

Q 1 : 7 candies

Q 7 : 8 candies

Q 2 : 6 groups

Q 8 : 42 liters

Q 3 : 8 books

Q 9 : 660 milliliters

Q 4 : 10 hamburgers

Q 10 : 63 fish

Q 5 : 40 dollars

Q 11 : 16 dollars

Q 6 : 30 fingers

Q 12 : 28 eggs