

Name: \_\_\_\_\_ Class: \_\_\_\_\_

**Question 1**


Lisa is 130 cm tall. Nina is 5 cm shorter than Lisa.  
How tall is Nina?



Lisa is \_\_\_\_\_ cm tall. Nina is \_\_\_\_\_ cm shorter than Lisa.  
How tall is Nina?

**Question 2**


The mass of 1 orange is 200 grams.  
What is the mass of 5 oranges?



The mass of 1 orange is \_\_\_\_\_ grams.  
What is the mass of \_\_\_\_\_ oranges?

**Question 3**

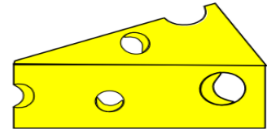
Luigi had 1,000 grams of apples.  
If he ate 300 grams, how much apple did he have left?



Luigi had \_\_\_\_\_ grams of apples.  
If he ate \_\_\_\_\_ grams, how much did he have left?

#### Question 4

Mario needs 300 grams of cheese to put on a pizza. He has only 210 grams. How much more cheese does he need?



Mario needs \_\_\_\_\_ grams of cheese to put on a pizza. He has only \_\_\_\_\_ grams. How much more cheese does he need?

#### Question 5

Yesterday Jamie finished playing football at 8.00 pm. He played for 30 minutes. At **what time** did he start?



Yesterday Jamie finished playing football at \_\_\_\_ pm. He played for \_\_\_\_ minutes. At **what time** did he start?

#### Question 6

Nessy drank 10 liters of water.  
Bessy drank 3 liter of water less than John.  
How much water did they drink altogether?



Nessy drank \_\_\_\_\_ liters of water.  
Bessy drank \_\_\_\_\_ liters of water less than John.  
How much water did they drink altogether?

## Answers

Q 1 : 125 centimeters

Q 4 : 90 grams

Q 2 : 1000 grams/ 1 kilogram

Q 5 : 7:30 pm

Q 3 : 700 grams

Q 6 : 17 liters