

# Grade 1      Multiplication and Division      Word Problems

Name: \_\_\_\_\_ Class: \_\_\_\_\_

## Question 1

There are 9 boxes. There are 2 pencils in each box.  
How many pencils are there altogether?



## Question 2

Peter has 15 books. He puts them **equally** in 5 groups.  
How many books are in each group?

## Question 3

The price of a pizza is 3 dollars.  
What is the price of 5 pizzas?

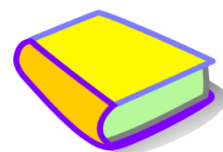


## Question 4

There are 5 fingers on 1 hand. How many fingers are there on 5 hands?

## Question 5

There are 8 groups of 3 books.  
How many books are there altogether?




### Question 6

18 boys are playing football. They play in groups of 3.  
How many groups are there?

### Question 7

The teacher puts 14 boys **equally** in 2 groups.  
How many boys are in each group?

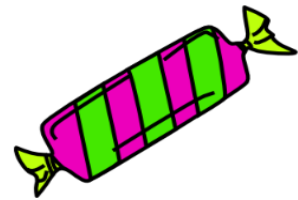


### Question 8

A car has 4 wheels. How many wheels do 4 cars have?

### Question 9

John and Peter share 16 candies **equally**.  
How many candies does each of them get?



### Question 10

There are 4 groups of 5 students. How many students are there **altogether**?

## Answers

Q 1 : 18 pencils

Q 2 : 3 books

Q 3 : 15 dollars

Q 4 : 25 fingers

Q 5 : 24 books

Q 6 : 6 groups

Q 7 : 7 boys

Q 8 : 16 wheels

Q 9 : 8 candies

Q 10 : 20 students