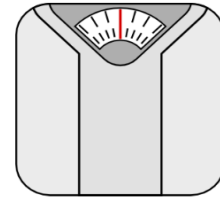


# Grade 1 Measurement Word Problems

Name: \_\_\_\_\_ Class: \_\_\_\_\_

## Question 1

Peter weighs 32 kilograms. John weighs 53 kilograms.  
How much do they weigh **altogether**?




## Question 2

Aries weighs 80 kilograms. Rick weighs 78 kilograms.  
How much **heavier** is Aries **than** Rick?

## Question 3

Jimmy is 145 centimeters tall. Eddy is 10 centimeters **taller**.  
How tall is Eddy?




## Question 4

A pencil is 12 centimeters long. An eraser is 3 centimeters **shorter than** the pencil.  
How long is the eraser?

### Question 5

Building A is 80 meters tall. Building B is 20 meters **shorter**.  
How tall is building B?

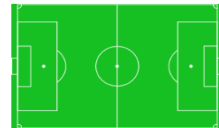


### Question 6

A week has 7 days.  
How many days are there in 3 weeks?

### Question 7

A football field is 60 meters long. A swimming pool is 40 meters long. **How much longer** is the football field than the swimming pool?



### Question 8

A pencil is 12 centimeters long. An eraser is 3 centimeters shorter than the pencil.  
How long are they **altogether**?

### Question 9

There are 12 months in a year.  
How many months are there in 4 years?



### Question 10

A fish tank has a volume of 33 liters. Debra **pours** 15 liters of water in the tank. How much water is in the tank now?

### Answers

Q 1 : 85 kilograms

Q 6 : 21 days

Q 2 : 2 kilograms

Q 7 : 20 meters

Q 3 : 155 centimeters

Q 8 : 21 centimeters

Q 4 : 9 centimeters

Q 9 : 48 months

Q 5 : 60 meters

Q 10 : 48 liters