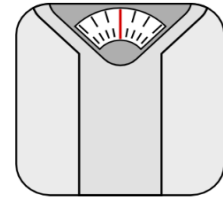


Grade 1 Measurement Word Problems

Name: _____ Class: _____

Question 1


Peter weighs 42 kilograms. John weighs 38 kilograms.
How much do they weigh altogether?



Peter weighs ____ kilograms. John weighs ____ kilograms.
How much do they weigh altogether?

Question 2

There is 12 liters of water in a fish tank. Jane pours 5 liters
more in the tank. How much water is in the tank now?



There is _____liters of water in a fish tank. Jane pours _____
liters more in the tank. How much water is in the tank now?

Question 3

Petra is 145 centimeters tall. Joey is 10 centimeters shorter
than Petra. How tall is Joey?



Petra is ____ centimeters tall. Joey is ____ centimeters
shorter than Petra. How tall is Joey?

Question 4

A week has 7 days.

How many days are there in 3 weeks?



A week has ____ days.

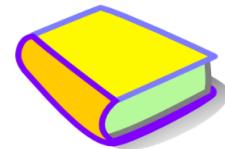
How many days are there in ____ weeks?

Question 5

A book is 45 centimeters long.

A pen is 13 centimeters long.

How much longer is the book than the pen?



A book is _____ centimeters long.

A pen is _____ centimeters long.

How much longer is the book than the pen?

Question 6

Peter weighs 60 kilograms. John weighs 74 kilograms.

How much lighter is Peter than John?



Peter weighs ____ kilograms. John weighs ____ kilograms.

How much lighter is _____ than _____?

Answers

Q 1 : 80 kilograms

Q 4 : 21 days

Q 2 : 17 liters

Q 5 : 32 centimeters

Q 3 : 135 centimeters

Q 6 : 14 kilograms